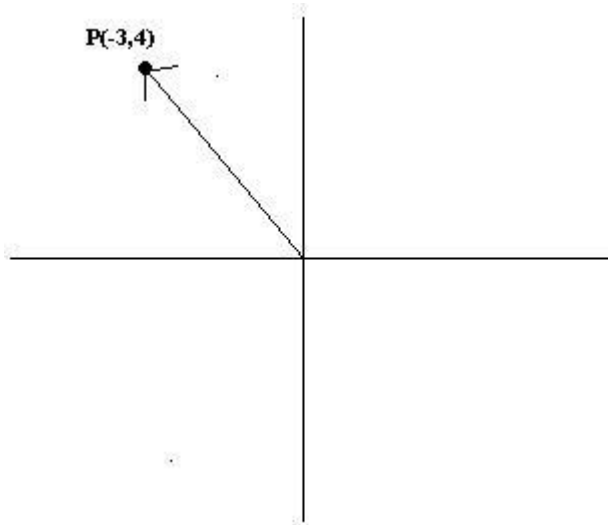


Sketch the graph of the line that goes thru the given terminal point. Give the sine, cosine, and tangent of the angle.

Simplify radicals.

(1.)  $P(-3, 4)$

(i.) Here is the diagram:



(ii.)  $a^2 + b^2 = c^2$  use the pythagorean theorem

$(-3)^2 + (4)^2 = c^2$  make substitutions

$9 + 16 = c^2$  multiply and combine like terms

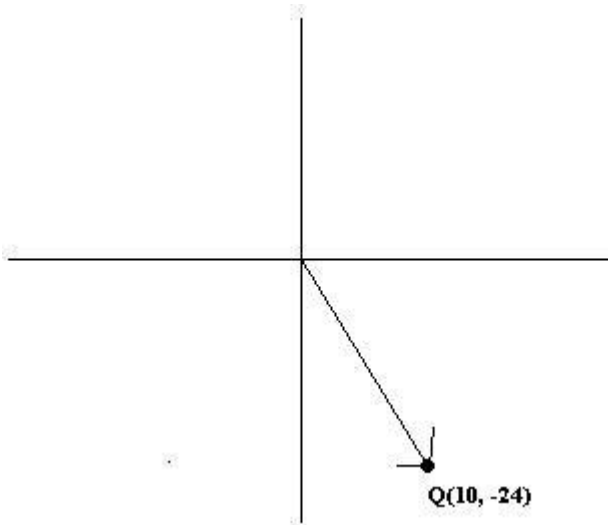
$25 = c^2$  add

$c = 5$  take square roots

results:  $\sin P = 4/5$  ;  $\cos P = -3/5$  ;  $\tan P = -4/3$

(2.)  $Q(10, -24)$

(i.) Here is the diagram:



(ii.)  $a^2 + b^2 = c^2$  use the pythagorean theorem

$$(-24)^2 + (10)^2 = c^2 \quad \text{make substitutions}$$

$$576 + 100 = c^2 \quad \text{square}$$

$$676 = c^2 \quad \text{combine like terms}$$

$$c = 26 \quad \text{take square roots}$$

results:  $\sin Q = -24/26$

$$\sin Q = -12/13 \quad \text{reduce}$$

$$\cos Q = 10/26$$

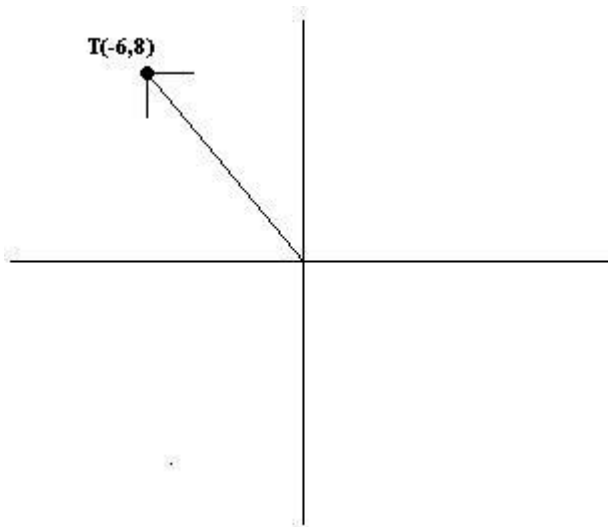
$$\cos Q = 5/13 \quad \text{reduce}$$

$$\tan Q = -24/10$$

$$\tan Q = -12/5 \quad \text{reduce}$$

(3.) T(-6, 8)

(i.) Here is the diagram:



(ii.)  $a^2 + b^2 = c^2$  use the pythagorean theorem

$$(-6)^2 + (8)^2 = c^2 \quad \text{make substitutions}$$

$$36 + 64 = c^2 \quad \text{square}$$

$$c^2 = 100 \quad \text{add}$$

$$c = 10 \quad \text{take square roots}$$

results:  $\sin T = 8/10$

$$\sin T = 4/5 \quad \text{reduce}$$

$$\cos T = -6/10$$

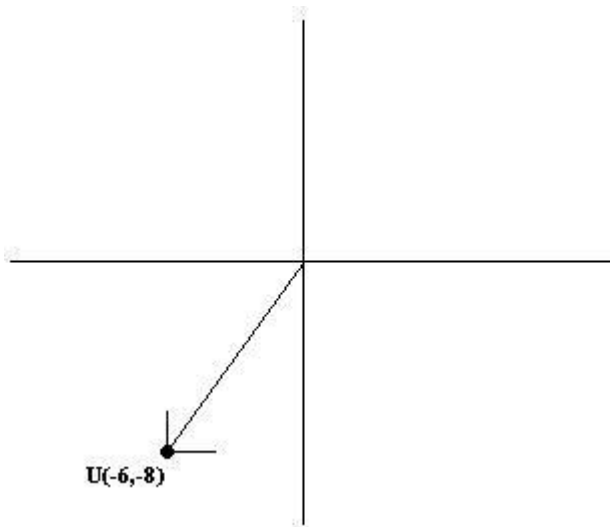
$$\cos T = -3/5 \quad \text{reduce}$$

$$\tan T = 8/-6$$

$$\tan T = -4/3 \quad \text{reduce}$$

(4.)  $U(-6, -8)$

(i.) Here is the diagram:



(ii.)  $a^2 + b^2 = c^2$  use the pythagorean theorem

$$(-6)^2 + (-8)^2 = c^2 \quad \text{make substitutions}$$

$$36 + 64 = c^2 \quad \text{square}$$

$$100 = c^2 \quad \text{combine like terms}$$

$$c = 10 \quad \text{take square roots}$$

results:  $\sin U = -8/10$

$$\sin U = -4/5 \quad \text{reduce}$$

$$\cos U = -6/10$$

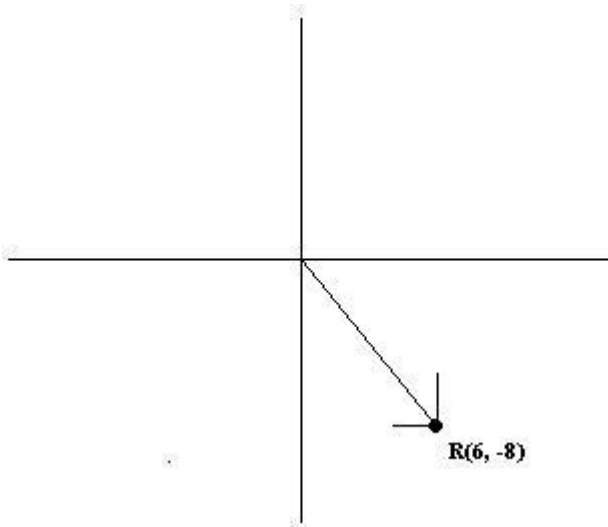
$$\cos U = -3/5$$

$$\tan U = -8/-6$$

$$\tan U = 4/3$$

(5.)  $R(6, -8)$

(i.) Here is the diagram:



(ii.)  $a^2 + b^2 = c^2$  use the pythagorean theorem

$(6)^2 + (-8)^2 = c^2$  make substitutions

$36 + 64 = c^2$  multiply

$100 = c^2$  combine like terms

$c = 10$  take square roots

results:  $\sin R = -8/10$

$\sin R = -4/5$  reduce

$\cos R = 6/10$

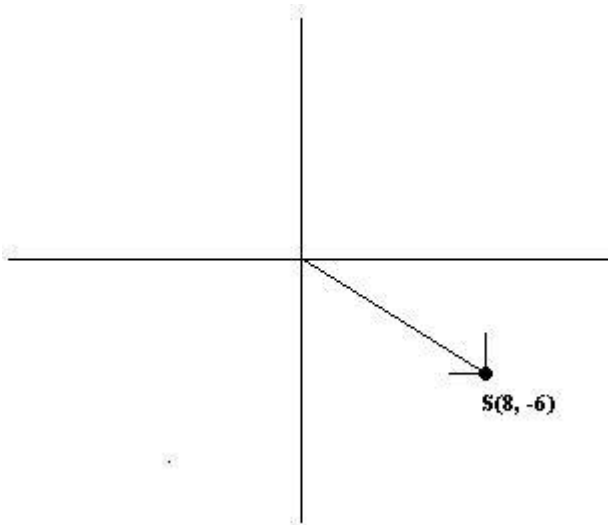
$\cos R = 3/5$  reduce

$\tan R = -8/6$

$\tan R = -4/3$  reduce

(6.)  $S(8, -6)$

(i.) Here is the diagram:



(ii.)  $a^2 + b^2 = c^2$  use the pythagorean theorem

$$(8)^2 + (-6)^2 = c^2 \quad \text{make substitutions}$$

$$64 + 36 = c^2 \quad \text{multiply}$$

$$c^2 = 100 \quad \text{add}$$

$$c = 10 \quad \text{take square roots}$$

results:  $\sin S = -6/10$

$$\sin S = -3/5 \quad \text{reduce}$$

$$\cos S = 8/10$$

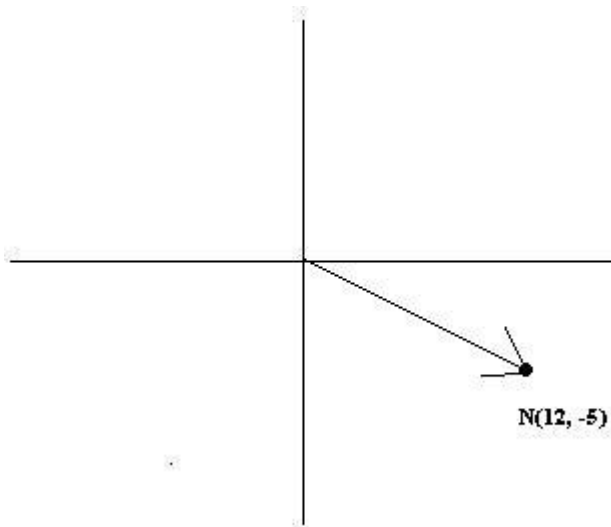
$$\cos S = 4/5 \quad \text{reduce}$$

$$\tan S = -6/8$$

$$\tan S = -3/4$$

(7.) N(12, -5)

(i.) Here is the diagram:



(ii.)  $a^2 + b^2 = c^2$  use the pythagorean theorem

$$(12)^2 + (-5)^2 = c^2 \quad \text{make substitutions}$$

$$144 + 25 = c^2 \quad \text{multiply}$$

$$c^2 = 169 \quad \text{add}$$

$$c = 13 \quad \text{take sq root}$$

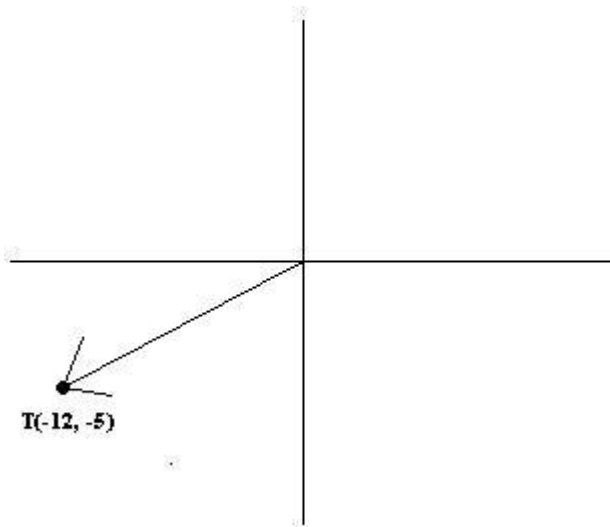
results:  $\sin N = -5/13$

$$\cos N = 12/13$$

$$\tan N = -5/12$$

(8.)  $T(-12, -5)$

(i.) Here is the diagram:



(ii.)  $a^2 + b^2 = c^2$  use the pythagorean thorem

$$(-12)^2 + (5)^2 = c^2 \quad \text{make substitutions}$$

$$144 + 25 = c^2 \quad \text{multiply}$$

$$c^2 = 169 \quad \text{add}$$

$$c = 13 \quad \text{take square roots}$$

results:  $\sin T = -5/13$

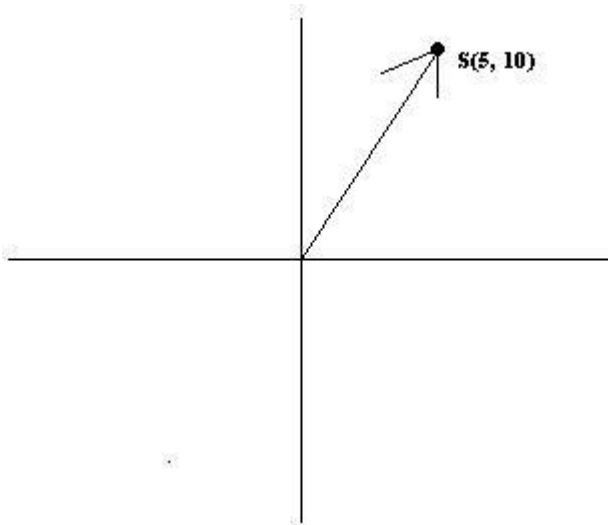
$$\cos T = -12/13$$

$$\tan T = 5/12$$

(9.)  $S(5, 10)$

(i.) Here is the diagram:





(ii.)  $a^2 + b^2 = c^2$  use the pythagorean theorem

$$(5)^2 + (10)^2 = c^2 \quad \text{make substitutions}$$

$$25 + 100 = c^2 \quad \text{multiply}$$

$$c^2 = 125 \quad \text{add}$$

$$c^2 = 25 \cdot 5 \quad \text{factor like this}$$

$$c = 5\sqrt{5} \quad \text{take square roots}$$

results:  $\sin S = 10/5\sqrt{5}$

$$\sin A = 5/\sqrt{5} \quad \text{reduce}$$

$$\sin A = 5\sqrt{5}/5 \quad \text{multiply top and bottom by } \sqrt{5}$$

$$\sin A = \sqrt{5} \quad \text{cancel}$$

$$\cos A = 5/5\sqrt{5}$$

$$\cos A = 1/\sqrt{5} \quad \text{reduce}$$

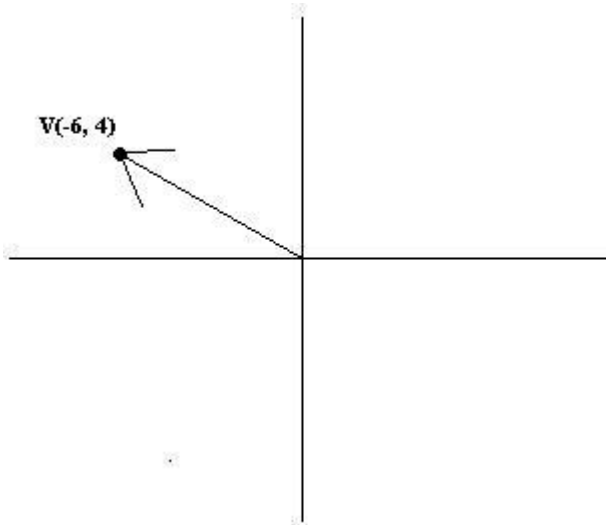
$$\cos A = \sqrt{5}/5 \quad \text{multiply top and bottom by } \sqrt{5}$$

$$\tan A = 10/5$$

$$\tan A = 2 \quad \text{divide}$$

(10.)  $V(-6, 4)$

(i.) Here is the diagram:



(ii.)  $a^2 + b^2 = c^2$  use the pythagorean theorem

$$(-6)^2 + (4)^2 = c^2 \quad \text{make substitutions}$$

$$36 + 16 = c^2 \quad \text{multiply}$$

$$c^2 = 52 \quad \text{add}$$

$$c^2 = 4 \cdot 13 \quad \text{factor like this}$$

$$c = 2\sqrt{13} \quad \text{take square roots}$$

results:  $\sin V = 4/2\sqrt{13}$

$$\sin V = 2/\sqrt{13} \quad \text{reduce}$$

$$\sin V = 2\sqrt{13}/13 \quad \text{multiply top and bottom by } \sqrt{13}$$

$$\cos V = -6/2\sqrt{13}$$

$$\cos V = -3/\sqrt{13} \quad \text{reduce}$$

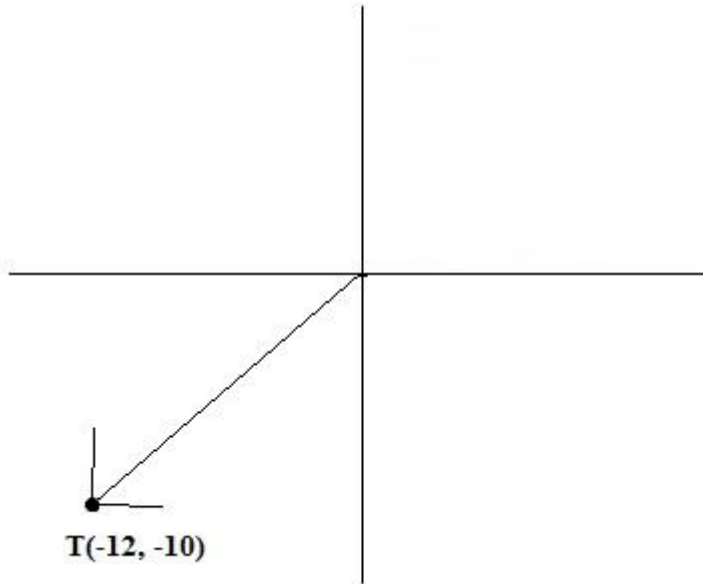
$$\cos V = -3\sqrt{13}/13 \quad \text{multiply top and bottom by } \sqrt{13}$$

$$\tan V = 4/-6$$

$$\tan V = -2/3 \quad \text{reduce}$$

$$(11.) \quad T(-12, -10)$$

(i.) Here is the diagram:



$$(ii.) \quad a^2 + b^2 = c^2 \quad \text{use the pythagorean theorem}$$

$$(-12)^2 + (-10)^2 = c^2 \quad \text{make substitutions}$$

$$144 + 100 = c^2 \quad \text{multiply}$$

$$c^2 = 244 \quad \text{add}$$

$$c^2 = 4 \cdot 61 \quad \text{factor like this}$$

$$c = 2\sqrt{61} \quad \text{take sq roots}$$

$$\text{results:} \quad \sin T = -10/2\sqrt{61}$$

$$\sin T = -5/\sqrt{61} \quad \text{reduce}$$

$$\sin T = -5\sqrt{61}/61 \quad \text{multiply top and bottom}$$

---

by  $\sqrt{61}$

$$\cos T = -12/2\sqrt{61}$$

$$\cos T = -6/\sqrt{61} \quad \text{reduce}$$

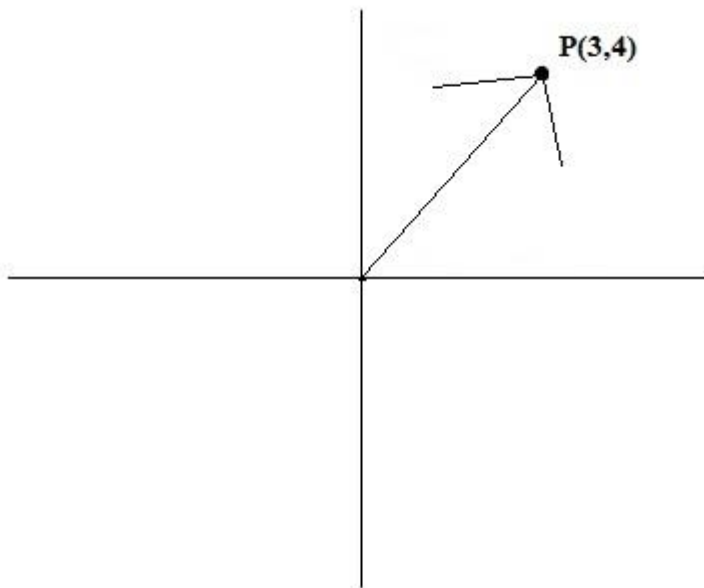
$$\cos T = -6\sqrt{61}/61 \quad \text{multiply top and bottom by } \sqrt{61}$$

$$\tan T = -10/-12$$

$$\tan T = 5/6 \quad \text{reduce}$$

(12.) P(3,4)

(i.) Here is the diagram:



(ii.)  $a^2 + b^2 = c^2$  use the pythagorean theorem

$$(3)^2 + (4)^2 = c^2 \quad \text{make substitutions}$$

$$c^2 = 9 + 16 \quad \text{multiply}$$

$$c^2 = 25 \quad \text{add}$$

$$c = 5 \quad \text{take sq roots}$$

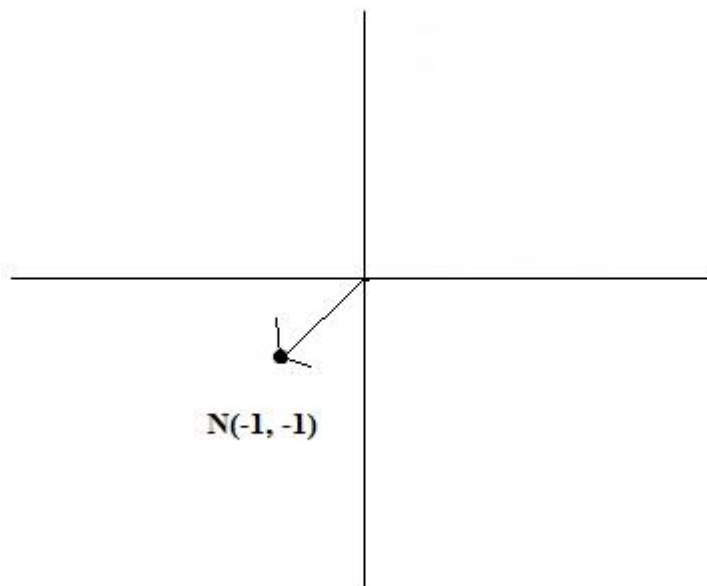
results:  $\sin P = 4/5$

$\cos P = 3/5$

$\tan P = 4/3$

(13.)  $N(-1, -1)$

(i.) Here is the diagram:



(ii.)  $a^2 + b^2 = c^2$  use the pythagorean theorem

$(-1)^2 + (-1)^2 = c^2$  make substitutions

$1 + 1 = c^2$  multiply

$c^2 = 2$  add

$c = \sqrt{2}$  take square roots

results:  $\sin N = -1/\sqrt{2}$

$\sin N = -\sqrt{2}/2$  multiply top and bottom by  $\sqrt{2}$

-

$$\cos N = -1/\sqrt{2}$$

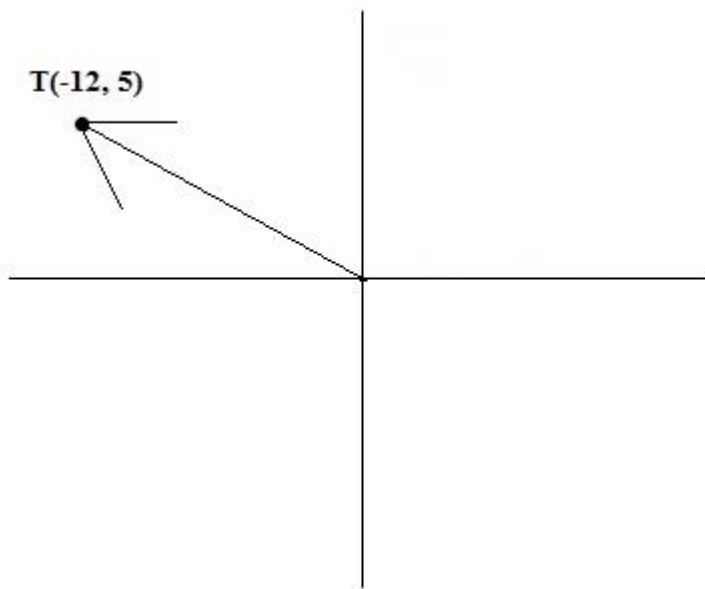
$$\cos N = -\sqrt{2}/2 \quad \text{multiply top and bottom by } \sqrt{2}$$

$$\tan N = -1/-1$$

$$\tan N = 1 \quad \text{divide}$$

(14.)  $T(-12, 5)$

(i.) Here is the diagram:



(ii.)  $a^2 + b^2 = c^2$  use the pythagorean theorem

$$(-12)^2 + (5)^2 = c^2 \quad \text{make substitutions}$$

$$144 + 25 = c^2 \quad \text{multiply}$$

$$c^2 = 169 \quad \text{add}$$

$$c = 13 \quad \text{take square roots}$$

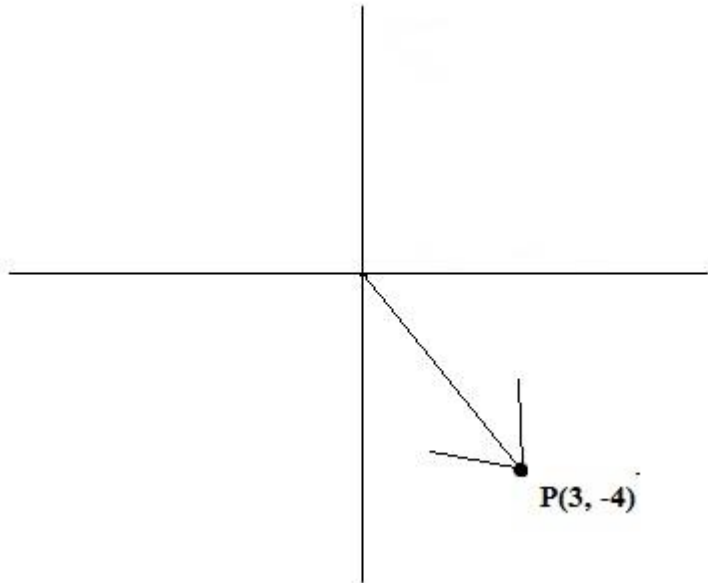
results:  $\sin T = 5/13$

$$\cos T = -12/13$$

$$\tan T = -5/12$$

(15.)  $P(3, -4)$

(i.) Here is the diagram:



(ii.)  $a^2 + b^2 = c^2$  use the pythagorean theorem

$$(3)^2 + (-4)^2 = c^2 \quad \text{make substitutions}$$

$$9 + 16 = c^2 \quad \text{multiply}$$

$$c^2 = 25 \quad \text{add}$$

$$c = 5 \quad \text{take square roots}$$

results:  $\sin P = -4/5$

$$\cos P = 3/5$$

$$\tan P = -4/3$$

Find the sin and the cosine from the given information.

Angle A is in Quadrant I.

(16.)  $\tan A = 2/3$

$$\sin A = 2/\sqrt{13}$$

$$\cos A = 3/\sqrt{13}$$

$$(17.) \quad \tan A = 5/12$$

$$\sin A = 5/13$$

$$\cos A = 12/13$$

$$(18.) \quad \tan A = 3/4$$

$$\sin A = 3/5$$

$$\cos A = 4/5$$

$$(19.) \quad \tan A = 15/8$$

$$\sin A = 15/17$$

$$\cos A = 8/17$$